



Resuelve cada problema.

1)  $4 - 3 =$  \_\_\_\_\_

2)  $2 - 1 =$  \_\_\_\_\_

3)  $1 + 3 =$  \_\_\_\_\_

4)  $5 - 2 =$  \_\_\_\_\_

5)  $1 - 1 =$  \_\_\_\_\_

6)  $4 + 0 =$  \_\_\_\_\_

7)  $3 + 2 =$  \_\_\_\_\_

8)  $1 + 1 =$  \_\_\_\_\_

9)  $2 + 3 =$  \_\_\_\_\_

10)  $3 + 0 =$  \_\_\_\_\_

11)  $3 - 2 =$  \_\_\_\_\_

12)  $5 - 5 =$  \_\_\_\_\_

13)  $2 + 1 =$  \_\_\_\_\_

14)  $5 - 4 =$  \_\_\_\_\_

15)  $4 - 4 =$  \_\_\_\_\_

16)  $1 + 0 =$  \_\_\_\_\_

**Respuestas**

1. \_\_\_\_\_

2. \_\_\_\_\_

3. \_\_\_\_\_

4. \_\_\_\_\_

5. \_\_\_\_\_

6. \_\_\_\_\_

7. \_\_\_\_\_

8. \_\_\_\_\_

9. \_\_\_\_\_

10. \_\_\_\_\_

11. \_\_\_\_\_


12. \_\_\_\_\_

13. \_\_\_\_\_

14. \_\_\_\_\_

15. \_\_\_\_\_

16. \_\_\_\_\_



Resuelve cada problema.

1)  $4 - 3 = \underline{1}$

2)  $2 - 1 = \underline{1}$

3)  $1 + 3 = \underline{4}$

4)  $5 - 2 = \underline{3}$

5)  $1 - 1 = \underline{0}$

6)  $4 + 0 = \underline{4}$

7)  $3 + 2 = \underline{5}$

8)  $1 + 1 = \underline{2}$

9)  $2 + 3 = \underline{5}$

10)  $3 + 0 = \underline{3}$

11)  $3 - 2 = \underline{1}$

12)  $5 - 5 = \underline{0}$


13)  $2 + 1 = \underline{3}$

14)  $5 - 4 = \underline{1}$

15)  $4 - 4 = \underline{0}$



16)  $1 + 0 = \underline{1}$



**Respuestas**1. 12. 13. 44. 35. 06. 47. 58. 29. 510. 311. 112. 013. 314. 115. 016. 1







Resuelve cada problema.



**Respuestas**



1) 4 - 3 = \_\_\_\_\_  
 - 



2) 2 - 1 = \_\_\_\_\_  
 - 



3) 1 + 3 = \_\_\_\_\_  
 + 



4) 5 - 2 = \_\_\_\_\_  
 - 



5) 1 - 1 = \_\_\_\_\_  
 - 



6) 4 + 0 = \_\_\_\_\_  
 + 



7) 3 + 2 = \_\_\_\_\_  
 + 



8) 1 + 1 = \_\_\_\_\_  
 + 



9) 2 + 3 = \_\_\_\_\_  
 + 



10) 3 + 0 = \_\_\_\_\_  
 + 



11) 3 - 2 = \_\_\_\_\_  
 - 

12) 5 - 5 = \_\_\_\_\_  
 - 

13) 2 + 1 = \_\_\_\_\_  
 + 

14) 5 - 4 = \_\_\_\_\_  
 - 

15) 4 - 4 = \_\_\_\_\_  
 - 

16) 1 + 0 = \_\_\_\_\_  
 + 

1. \_\_\_\_\_

2. \_\_\_\_\_

3. \_\_\_\_\_

4. \_\_\_\_\_

5. \_\_\_\_\_

6. \_\_\_\_\_

7. \_\_\_\_\_

8. \_\_\_\_\_

9. \_\_\_\_\_

10. \_\_\_\_\_

11. \_\_\_\_\_

12. \_\_\_\_\_

13. \_\_\_\_\_

14. \_\_\_\_\_

15. \_\_\_\_\_

16. \_\_\_\_\_